

Hakim had a collection of 92 baseball cards. He got 53 new baseball cards for his birthday. How many baseball cards does Hakim have now? Show or explain how you know.

A.

145	
92	53


has:



got:

$$92 + 53 = 145$$

$$\begin{array}{r} \cancel{9}2 \\ + 53 \\ \hline 1405 \end{array}$$



Hakim has  
145 baseball  
cards now.

Hakim had a collection of 92 baseball cards. He got 53 new baseball cards for his birthday. How many baseball cards does Hakim have now? Show or explain how you know.

(B)

$$\begin{array}{r} 92 \\ + 53 \\ \hline 145 \end{array}$$

Hakim has 145 baseball cards.

Hakim had a collection of 92 baseball cards. He got 53 new baseball cards for his birthday. How many baseball cards does Hakim have now? Show or explain how you know.

©

19

$$2 + 3 = 5$$

$$9 + 5 = 14$$

$$14 + 5 = 19$$

Hakim had a collection of 92 baseball cards. He got 53 new baseball cards for his birthday. How many baseball cards does Hakim have now? Show or explain how you know.

D

$$92 + 53 = 145$$

$$90 + 50 = 140$$

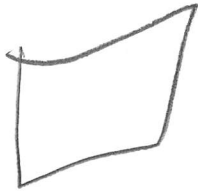
$$2 + 3 = 5$$

$$5 + 140 = 145$$

Hakim had a collection of 92 baseball cards. He got 53 new baseball cards for his birthday. How many baseball cards does Hakim have now? Show or explain how you know.

E

145



Hakim had a collection of 92 baseball cards. He got 53 new baseball cards for his birthday. How many baseball cards does Hakim have now? Show or explain how you know.

(F)

$$\begin{array}{r} 92 \\ + 53 \\ \hline 145 \end{array}$$

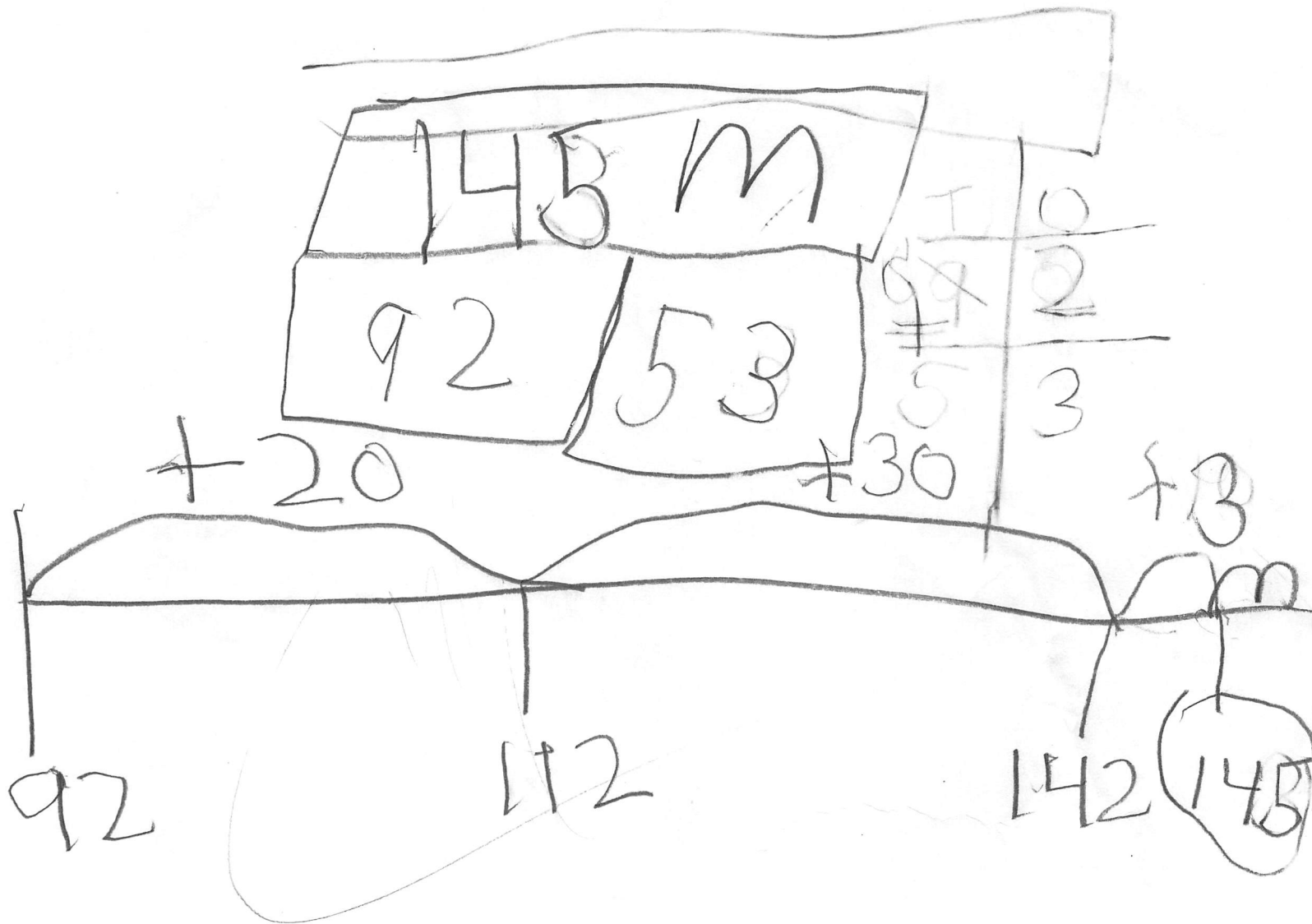
$$2 + 3 = 5$$

$$90 + 10 = 100$$

$$100 + 4 = 104$$

$$104 + 5 = 145$$


Hakim had a collection of 92 baseball cards. He got 53 new baseball cards for his birthday. How many baseball cards does Hakim have now? Show or explain how you know. ⑥



Hakim had a collection of 92 baseball cards. He got 53 new baseball cards for his birthday. How many baseball cards does Hakim have now? Show or explain how you know.

(H)

$$\begin{array}{r} 92 + 53 = 145 \\ \hline 1405 \end{array}$$




There are 145 Baseball Cards



Hakim had a collection of 92 baseball cards. He got 53 new baseball cards for his birthday. How many baseball cards does Hakim have now? Show or explain how you know.

1

$$92 + 53 = 145$$




45

145

$$140 + 5 = 145$$

Hakim had a collection of 92 baseball cards. He got 53 new baseball cards for his birthday. How many baseball cards does Hakim have now? Show or explain how you know.

J




Hakim had a collection of 92 baseball cards. He got 53 new baseball cards for his birthday. How many baseball cards does Hakim have now? Show or explain how you know.

(K)

$$145 - 92 = 53$$

$$145 - 53 = 92$$




$$\begin{array}{r} 92 \\ + 53 \\ \hline 145 \end{array}$$

$$145 = 100 + 40 + 5$$

$$92 + 53 = 145$$

Hakim had a collection of 92 baseball cards. He got 53 new baseball cards for his birthday. How many baseball cards does Hakim have now? Show or explain how you know.

(L)



145 baseball cards