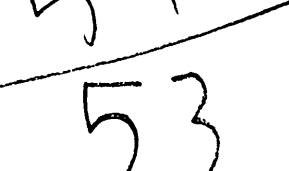


minutes. How many minutes did Hasan play altogether?
How do you know?

$25 + 28 = 53$



Hasan played tag for 25 minutes and then played basketball for 28 minutes. How many minutes did Hasan play altogether? Show or explain how you know.

$$25 + 28 = 53$$

B


|||

|||


Hasan played tag for 25 minutes and then played basketball for 28 minutes. How many minutes did Hasan play altogether? Show or explain how you know.

C

$$\begin{array}{r} 25 + 28 = \\ \hline 53 \end{array}$$



$$\begin{array}{r} 13 + \\ 40 = 53 \end{array}$$



$$\begin{array}{r} 5 + 8 = \\ 13 \end{array}$$

$$44 + 00$$

Hasan played tag for 25 minutes and then played basketball for 28 minutes. How many minutes did Hasan play altogether? Show or explain how you know.

D

|||||

|||||

|||||

|||||

25

|||||

|||||

|||||

|||||

28

|||||

|||||


|||||

|||||

53

$$25 + 28 = \underline{53}$$

Hasan played tag for 25 minutes and then played basketball for 28 minutes. How many minutes did Hasan play altogether? Show or explain how you know. **E**



$$25 + 28 = 53$$

Hasan played 53 minutes altogether.


$$5 + 8 = 13$$

$$40 + 10 = 50$$

$$50 + 3 = 53$$

Hasan played tag for 25 minutes and then played basketball for 28 minutes. How many minutes did Hasan play altogether? Show or explain how you know.

F



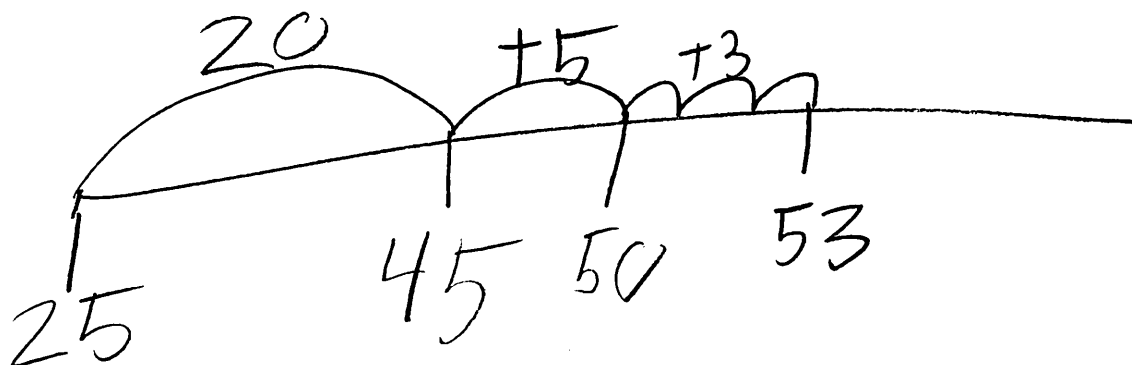
Hasan played tag for 25 minutes and then played basketball for 28 minutes. How many minutes did Hasan play altogether? Show or explain how you know.

G



$$10 + 10 + 10 + 10 + 10 = 50$$

$$50 + 3 = 53$$



Hasan played tag for 25 minutes and then played basketball for 28 minutes. How many minutes did Hasan play altogether? Show or explain how you know.


H

Handwritten work showing the addition of 25 and 28 to find the total minutes played.

25
11 9 4 5 5

28
54 11 XXXXX XXX

Hasan played tag for 25 minutes and then played basketball for 28 minutes. How many minutes did Hasan play altogether? Show or explain how you know.



Hasan played tag for 25 minutes and then played basketball for 28 minutes. How many minutes did Hasan play altogether? Show or explain how you know.

| |
|---------|
| 53 |
| 25 28 |

$$25 + 28 = 53$$

Hasan played games for 53 minutes.